
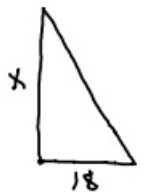
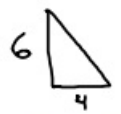


1-30-20 2^{no} Geo

7-4 

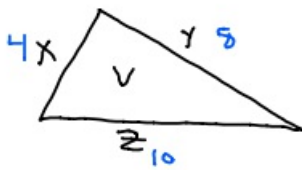
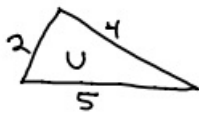
③



$$\frac{6}{x} = \frac{4}{18}$$

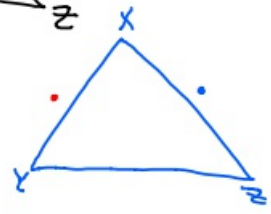
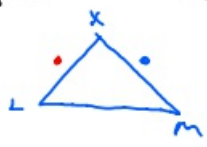
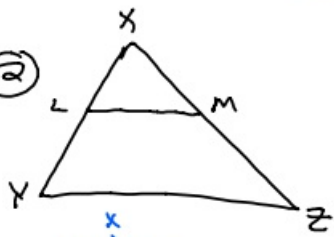
$$4x = 108$$
$$x = 27$$

④




$$x + y$$
$$4 + 8 = 12$$

②



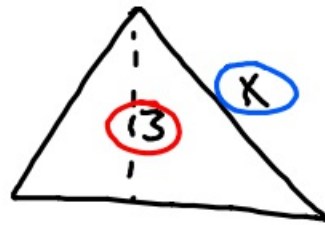
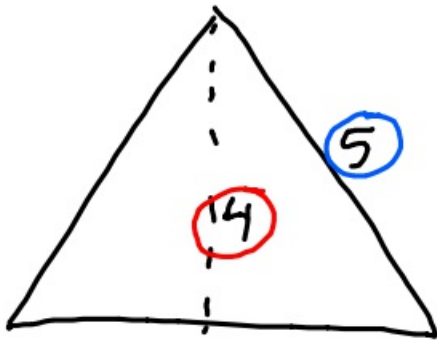
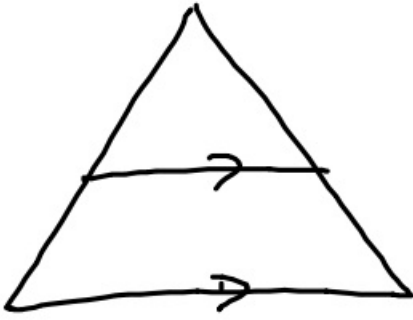
$$\frac{XM}{XZ} = \frac{XL}{XY}$$



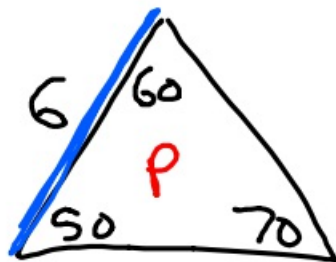
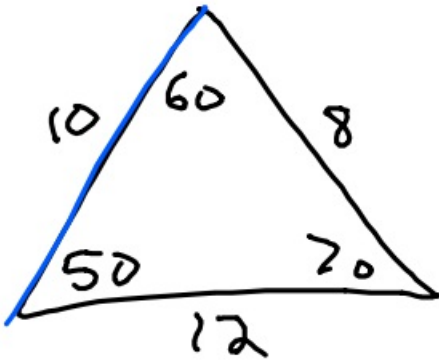
$$\frac{8 \frac{1}{2}}{3} = 2 \frac{5}{6}$$

$\frac{5}{6}$ is how many
16^{ins} (ruler)

$$\frac{5}{6} = \frac{x}{16}$$



$$\frac{3}{4} = \frac{x}{5}$$



What is \uparrow perimeter?

$$\frac{6}{10} = \frac{P}{30}$$