

10-1 Area of multiple shapes

Name: _____

Time Start: _____ Finish: _____

Total Time = _____

Give the area of each figure below. Find the area of the shaded region for #3, 5-8, 10

Figure 1

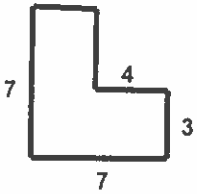


Figure 2

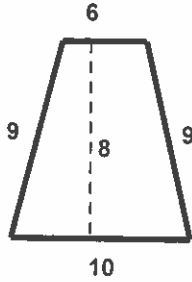


Figure 3

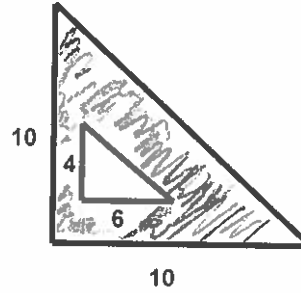


Figure 4

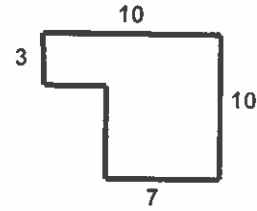


Figure 5

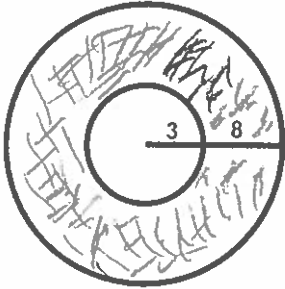


Figure 6

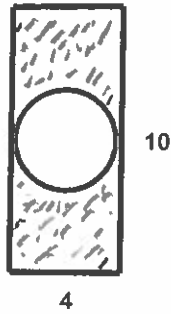


Figure 7

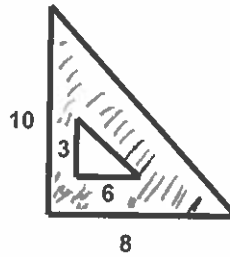


Figure 8

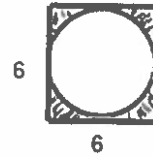


Figure 9

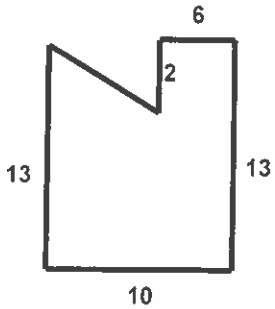


Figure 10

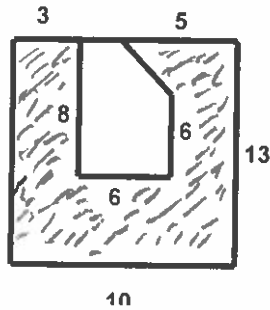


Figure 11

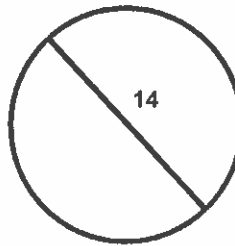


Figure 12

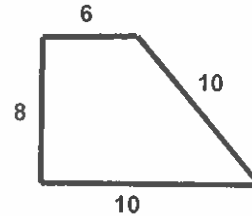


Figure 1 = _____

Figure 2 = _____

Figure 3 = _____

Figure 4 = _____

Figure 5 = _____

Figure 6 = _____

Figure 7 = _____

Figure 8 = _____

Figure 9 = _____

Figure 10 = _____

Figure 11 = _____

Figure 12 = _____