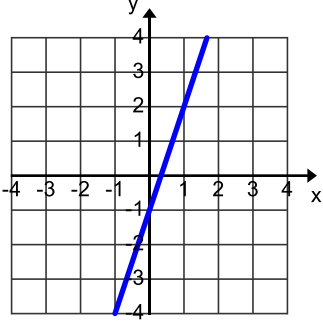
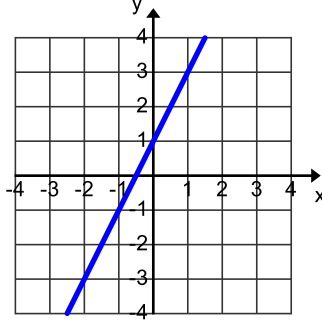


4-4 Graphing Slope ($y = mx + b$) ANSWERS

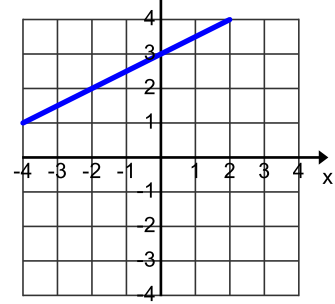
1. $y = 3x - 1$



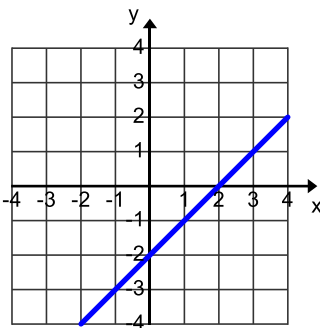
2. $y = 2x + 1$



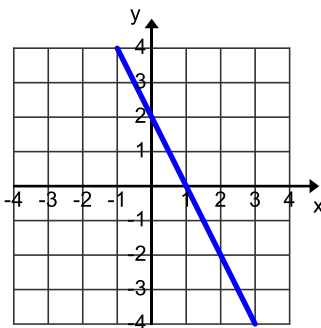
3. $y = \frac{1}{2}x + 3$



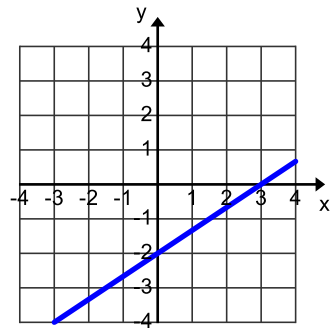
4. $y = x - 2$



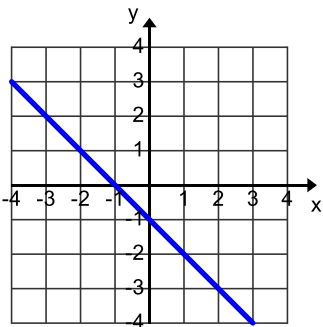
5. $y = -2x + 2$



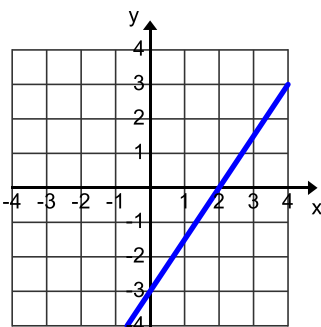
6. $y = \frac{2}{3}x - 2$



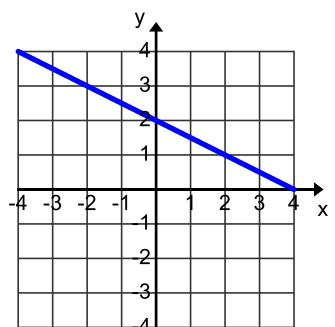
7. $y = -x - 1$



8. $y = \frac{3}{2}x - 3$



9. $y = -\frac{1}{2}x + 2$



10. $y = 2x - 4$

11. $y = -2x + 1$

12. $y = -\frac{1}{2}x + 2$

13. $y = \frac{2}{3}x - 1$

14. $y = 3x - 2$

15. $y = \frac{1}{3}x + 2$