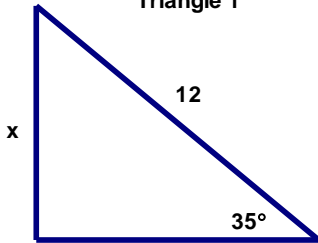


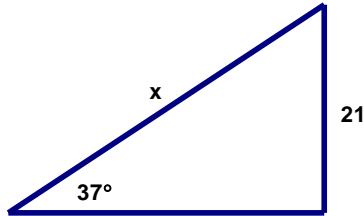
Geometry Chapter 8 Practice Test 1

Name _____

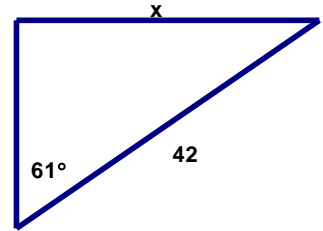
Triangle 1



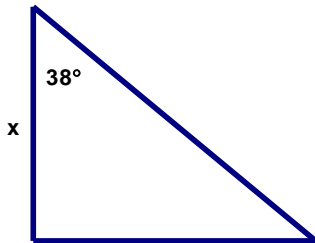
Triangle 2



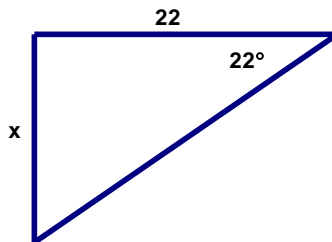
Triangle 3



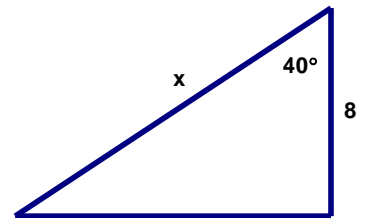
Triangle 4



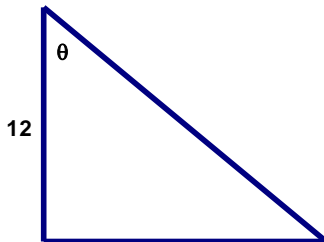
Triangle 5



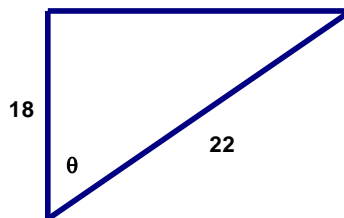
Triangle 6



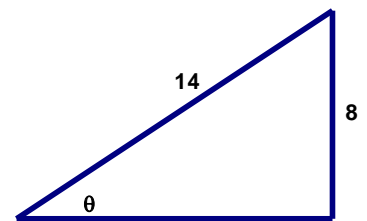
Triangle 7



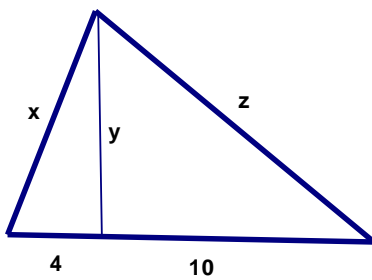
Triangle 8



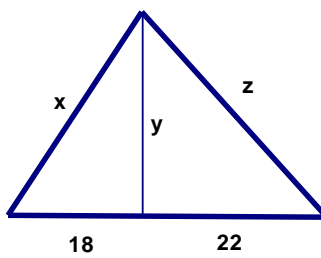
Triangle 9



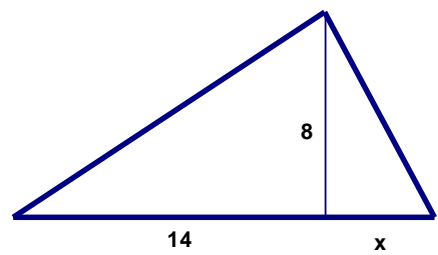
Triangle 10



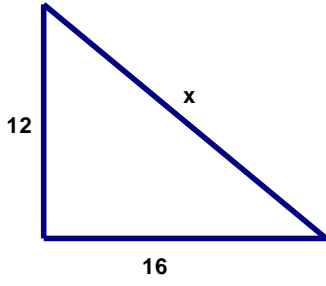
Triangle 11



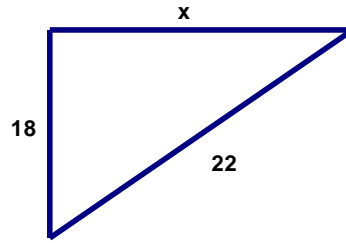
Triangle 12



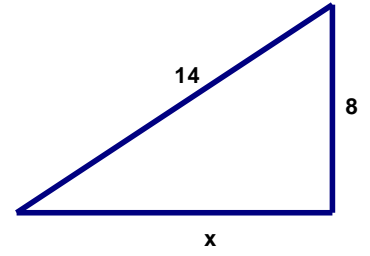
Triangle 13



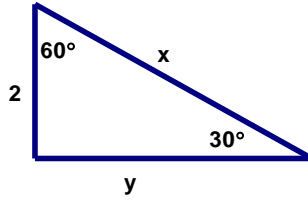
Triangle 14



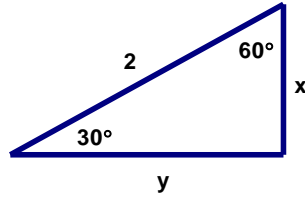
Triangle 15



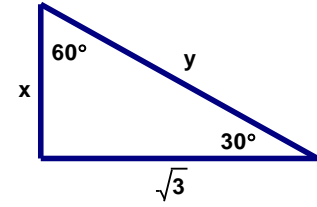
Triangle 16



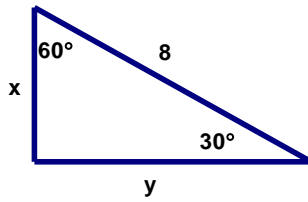
Triangle 17



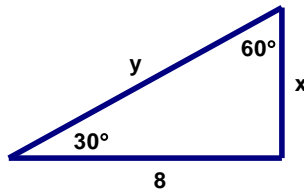
Triangle 18



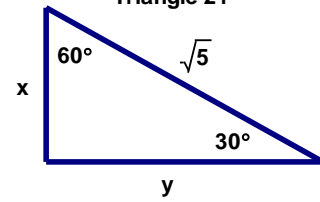
Triangle 19



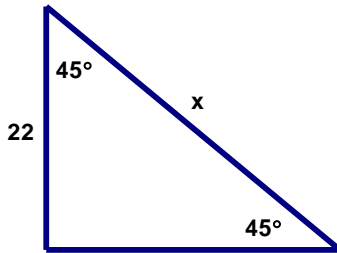
Triangle 20



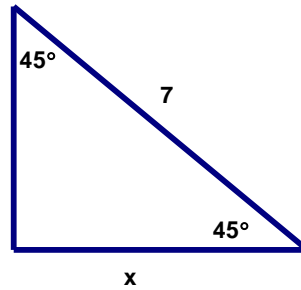
Triangle 21



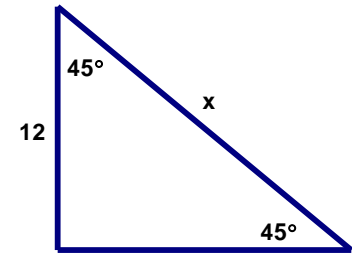
Triangle 22



Triangle 23



Triangle 24



Geometry Chapter 8 Practice Test 1 Answers

Name _____

1. $x =$ _____

2. $x =$ _____

3. $x =$ _____

4. $x =$ _____

5. $x =$ _____

6. $x =$ _____

7. $\theta =$ _____

8. $\theta =$ _____

9. $\theta =$ _____

10. $x =$ _____ $y =$ _____ $z =$ _____

11. $x =$ _____ $y =$ _____ $z =$ _____

12. $x =$ _____

13. $x =$ _____

14. $x =$ _____

15. $x =$ _____

16. $x =$ _____ $y =$ _____

17. $x =$ _____ $y =$ _____

18. $x =$ _____ $y =$ _____

19. $x =$ _____ $y =$ _____

20. $x =$ _____ $y =$ _____

21. $x =$ _____ $y =$ _____

22. $x =$ _____

23. $x =$ _____

24. $x =$ _____