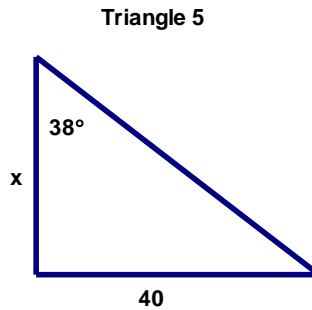
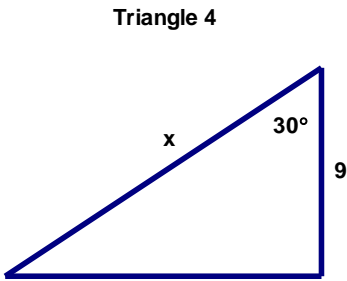
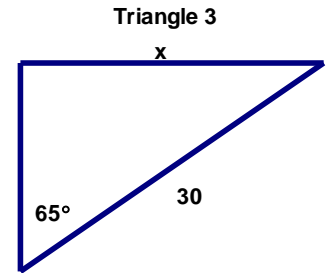
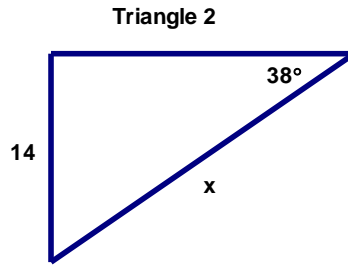
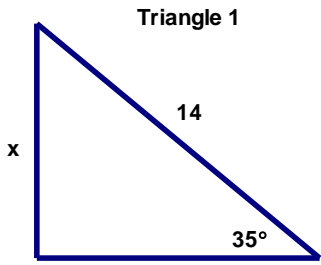


# 8-1 SOHCAHTOA



**All triangles above are right triangles.**

- \_\_\_\_\_ 1. What is the value of  $x$  in Triangle 1 above?
- \_\_\_\_\_ 2. What is the value of  $x$  in Triangle 2 above?
- \_\_\_\_\_ 3. What is the value of  $x$  in Triangle 3 above?
- \_\_\_\_\_ 4. What is the value of  $x$  in Triangle 4 above?
- \_\_\_\_\_ 5. What is the value of  $x$  in Triangle 5 above?