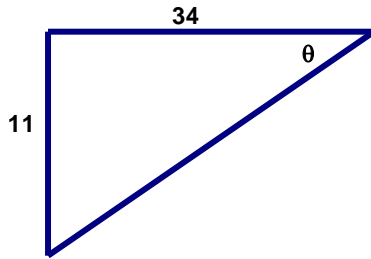
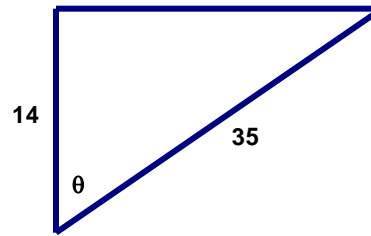


8-2 SOHCAHTOA 2 Finding the angle

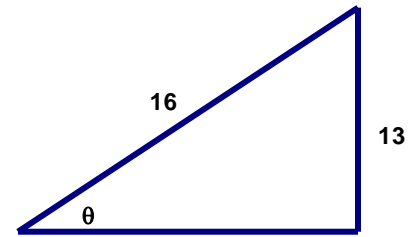
Triangle 1



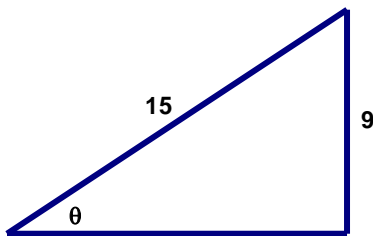
Triangle 2



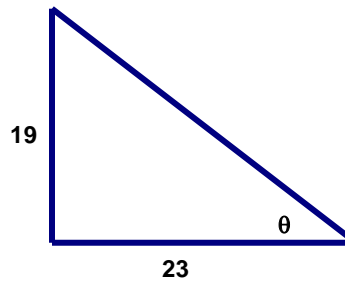
Triangle 3



Triangle 4



Triangle 5



All triangles above are right triangles.

- _____ 1. What is the value of θ in Triangle 1 above?
- _____ 2. What is the value of θ in Triangle 2 above?
- _____ 3. What is the value of θ in Triangle 3 above?
- _____ 4. What is the value of θ in Triangle 4 above?
- _____ 5. What is the value of θ in Triangle 5 above?