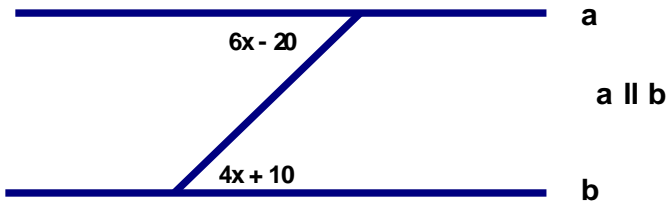
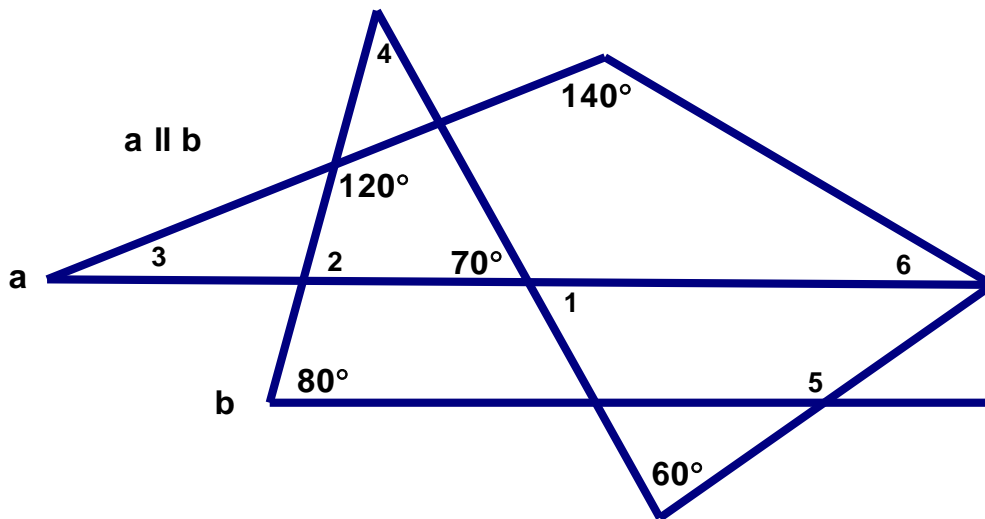
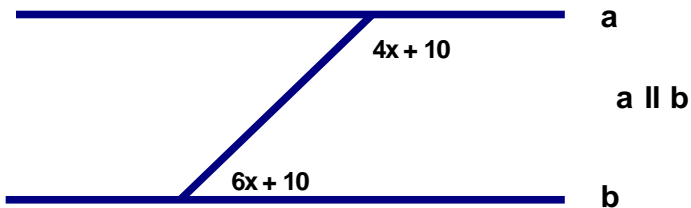


Chapter 3 Finding Missing Angles

- _____ 1. What is the value of x in the figure below?
 A. 15° B. 16° C. 19° D. 21°



- _____ 2. What is the value of x in the figure below?
 A. 15° B. 16° C. 19° D. 0°



- _____ 3. What is the measurement of $\angle 1$ above?
 A. 20° B. 30° C. 70° D. 80°
- _____ 4. What is the measurement of $\angle 3$ above?
 A. 20° B. 30° C. 70° D. 80°
- _____ 5. What is the measurement of $\angle 6$ above?
 A. 20° B. 30° C. 70° D. 80°

