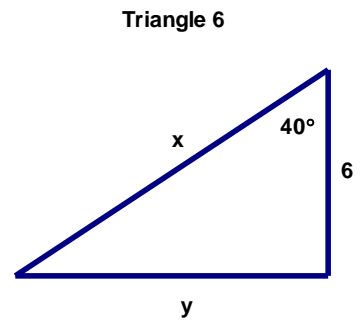
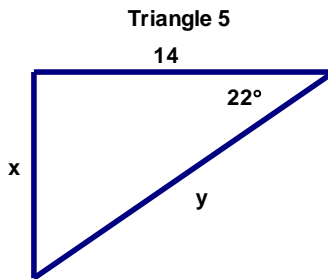
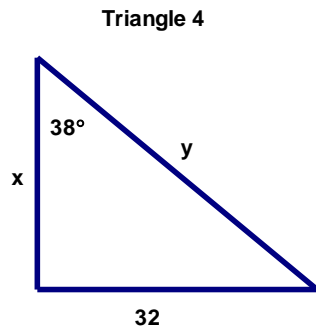
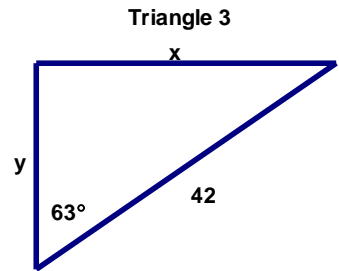
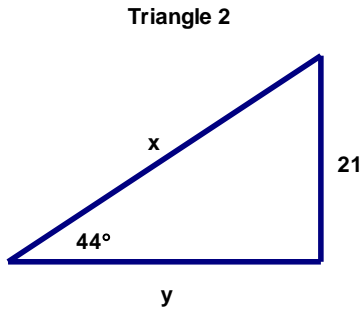
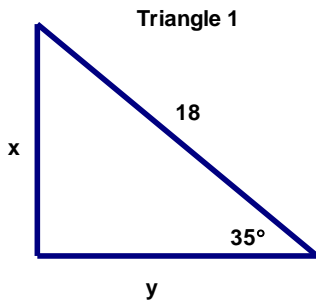


8-1 SOHCAHTOA

Name _____



Consider the right triangles above. Give the value of x and y rounded to the nearest tenth.

Triangle 1 $x =$ _____ $y =$ _____

Triangle 2 $x =$ _____ $y =$ _____

Triangle 3 $x =$ _____ $y =$ _____

Triangle 4 $x =$ _____ $y =$ _____

Triangle 5 $x =$ _____ $y =$ _____

Triangle 6 $x =$ _____ $y =$ _____