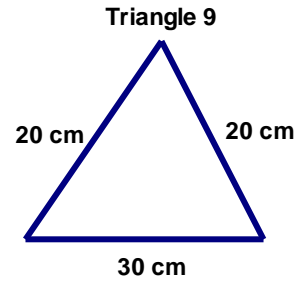
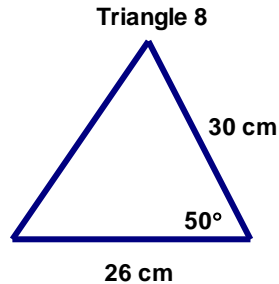
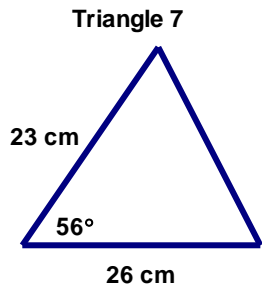
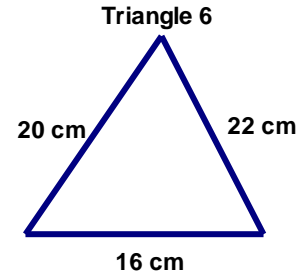
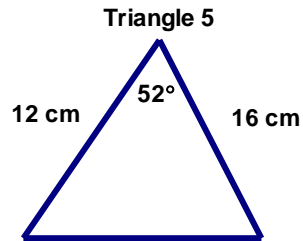
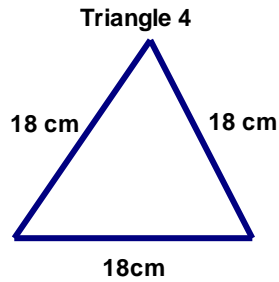
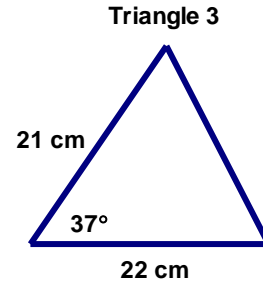
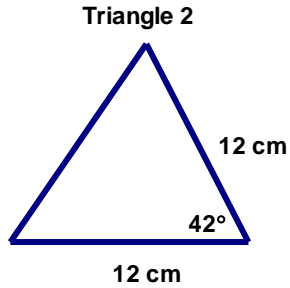
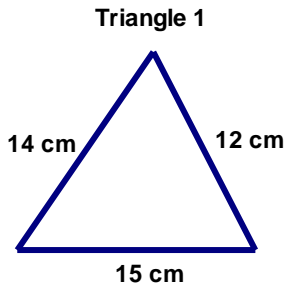


7-5 Heron's (Hero's) Formula and Basic Area Formula

Name _____

Calculate the area of the given triangles.



Triangle 1 = _____

Triangle 2 = _____

Triangle 3 = _____

Triangle 4 = _____

Triangle 5 = _____

Triangle 6 = _____

Triangle 7 = _____

Triangle 8 = _____

Triangle 9 = _____