

Trig Chapter 8 Practice Test 1

Name _____

Figure 1

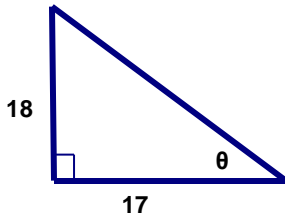


Figure 2

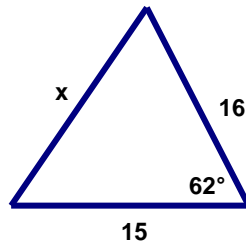


Figure 3

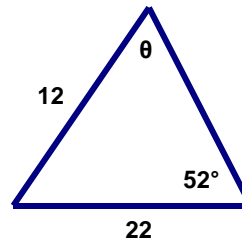


Figure 4

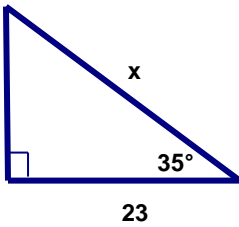


Figure 5

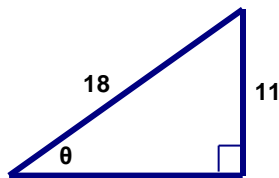


Figure 6

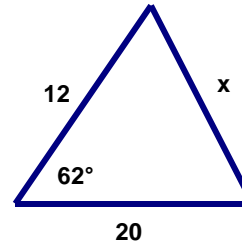


Figure 7

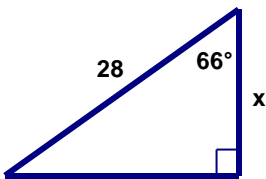


Figure 8

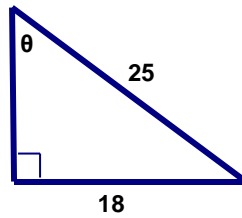


Figure 9

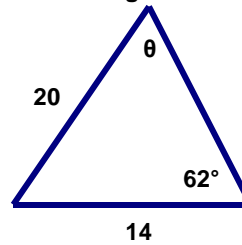


Figure 10

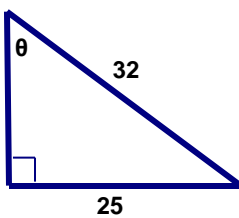


Figure 11

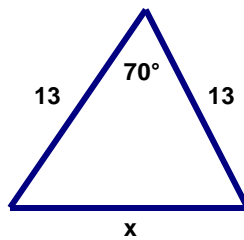


Figure 12

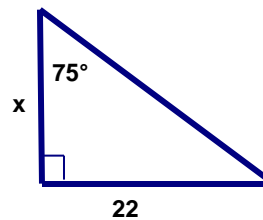


Figure 13

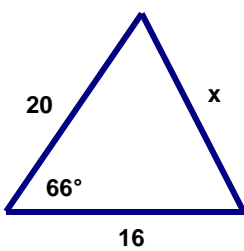


Figure 14

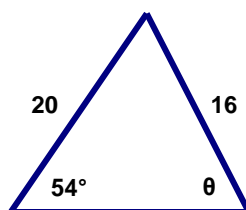


Figure 15

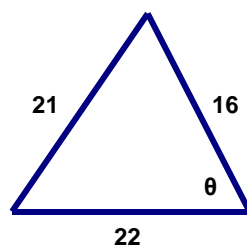


Figure 16

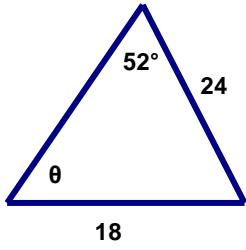


Figure 17

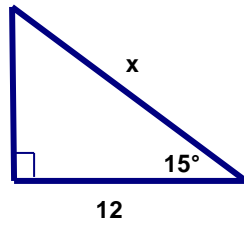


Figure 18

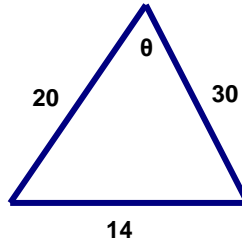


Figure 19

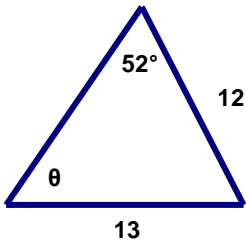


Figure 20

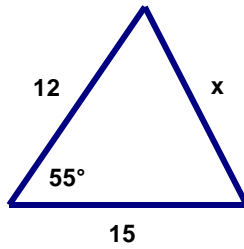


Figure 21

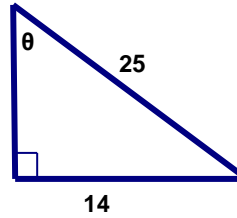


Figure 1 $\theta =$ _____

Figure 17 $x =$ _____

Figure 2 $x =$ _____

Figure 18 $\theta =$ _____

Figure 3 $\theta =$ _____

Figure 19 $\theta =$ _____

Figure 4 $x =$ _____

Figure 20 $x =$ _____

Figure 5 $\theta =$ _____

Figure 21 $\theta =$ _____

Figure 6 $x =$ _____

Figure 7 $x =$ _____

Figure 8 $\theta =$ _____

Figure 9 $\theta =$ _____

Figure 10 $\theta =$ _____

Figure 11 $x =$ _____

Figure 12 $x =$ _____

Figure 13 $x =$ _____

Figure 14 $\theta =$ _____

Figure 15 $\theta =$ _____

Figure 16 $\theta =$ _____