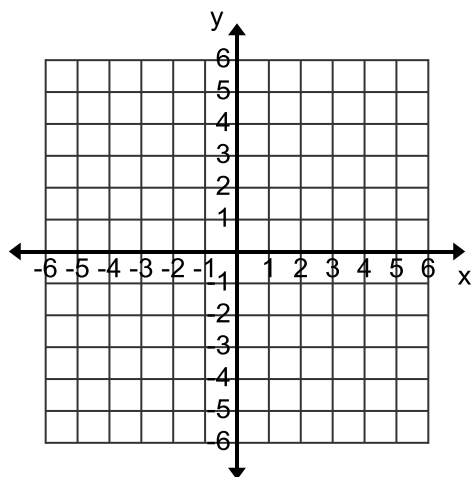


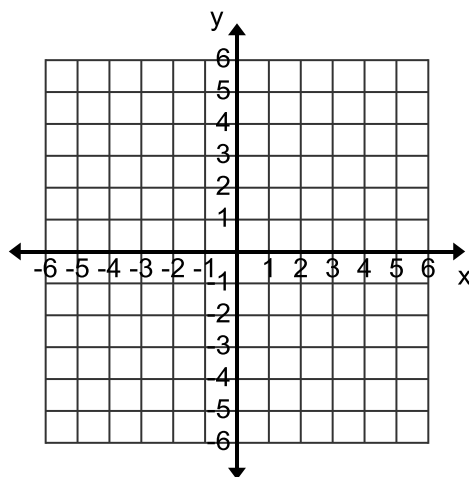
6-1 Graphing Systems of Inequalities

Graph the following on the given graphs.

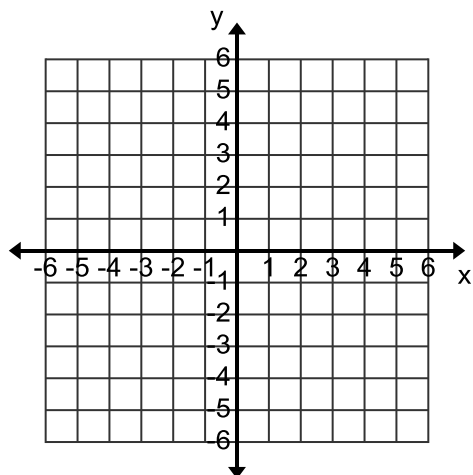
1.
$$\begin{cases} y \leq 3x - 1 \\ y > -2x + 1 \end{cases}$$



2.
$$\begin{cases} y > 1 \\ y < 3 \end{cases}$$



3.
$$\begin{cases} y \leq 2x - 1 \\ y > -2x + 1 \end{cases}$$



4.
$$\begin{cases} x > 1 \\ x < 3 \end{cases}$$

