

# 6-2 Parent Graphs

Tell what equation is graphed.

\_\_\_\_\_ Graph 1

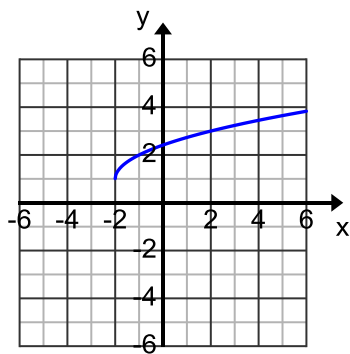
\_\_\_\_\_ Graph 2

\_\_\_\_\_ Graph 3

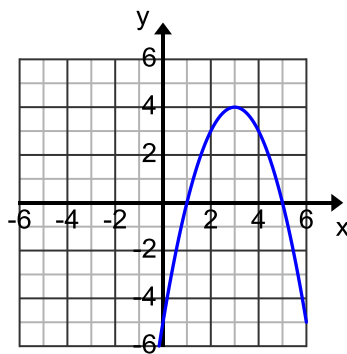
\_\_\_\_\_ Graph 4

\_\_\_\_\_ Graph 5

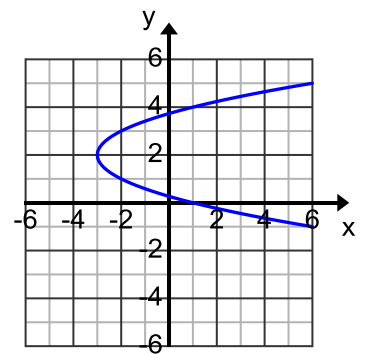
Graph 1



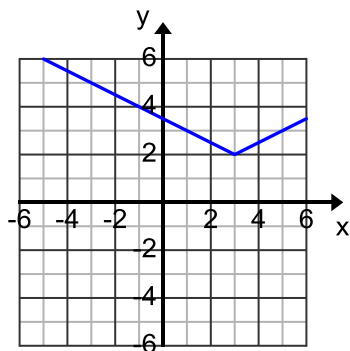
Graph 2



Graph 3



Graph 4



Graph 5

