

2-4 Increasing & Decreasing Intervals AND Extrema

Name: _____

Time Start: _____ Finish: _____

Total Time = _____

Use the Graph to the right to identify each part. If there is none, write "NONE."

- Absolute Maximum: _____

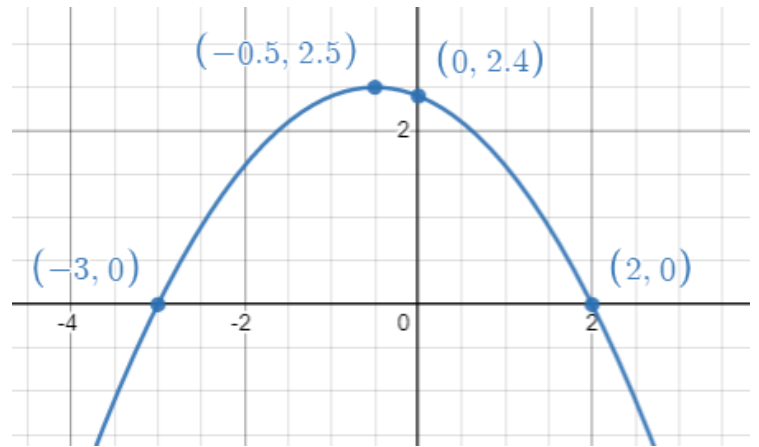
Absolute Minimum: _____

Relative Maximum: _____

Relative Minimum: _____

Increasing Intervals: _____

Decreasing Intervals: _____



- Absolute Maximum: _____

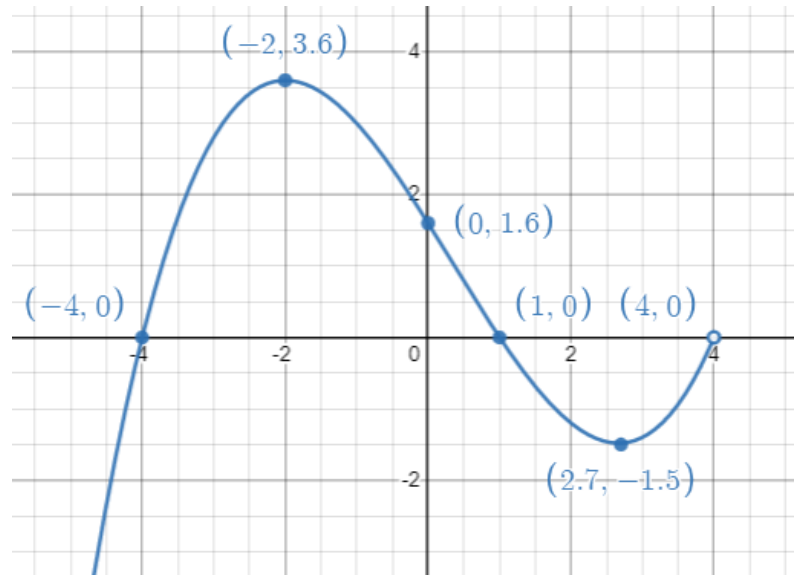
Absolute Minimum: _____

Relative Maximum: _____

Relative Minimum: _____

Increasing Intervals: _____

Decreasing Intervals: _____



- Absolute Maximum: _____

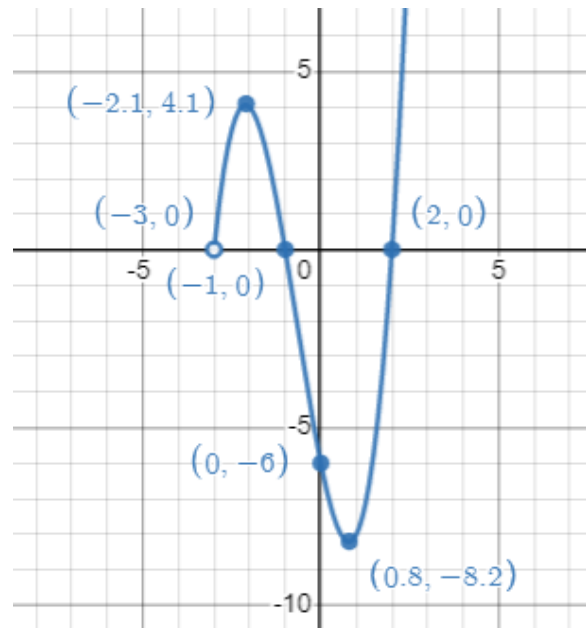
Absolute Minimum: _____

Relative Maximum: _____

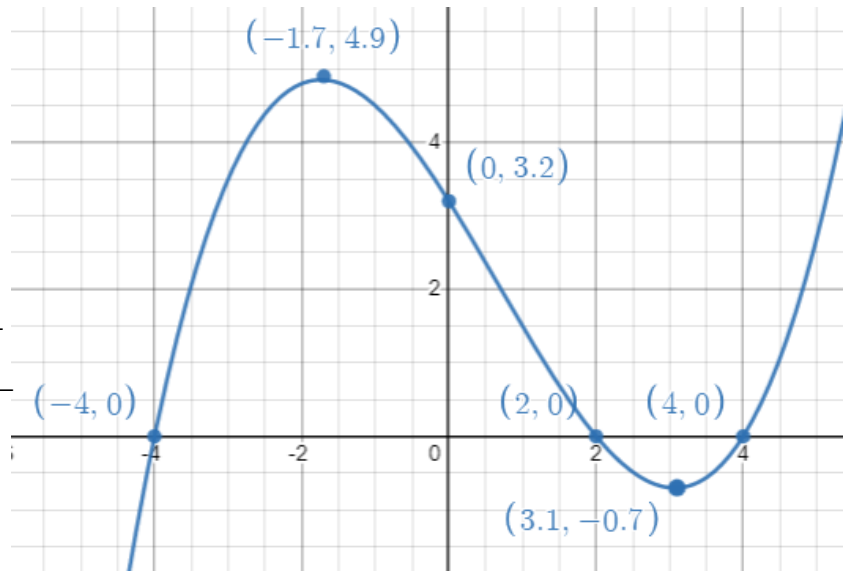
Relative Minimum: _____

Increasing Intervals: _____

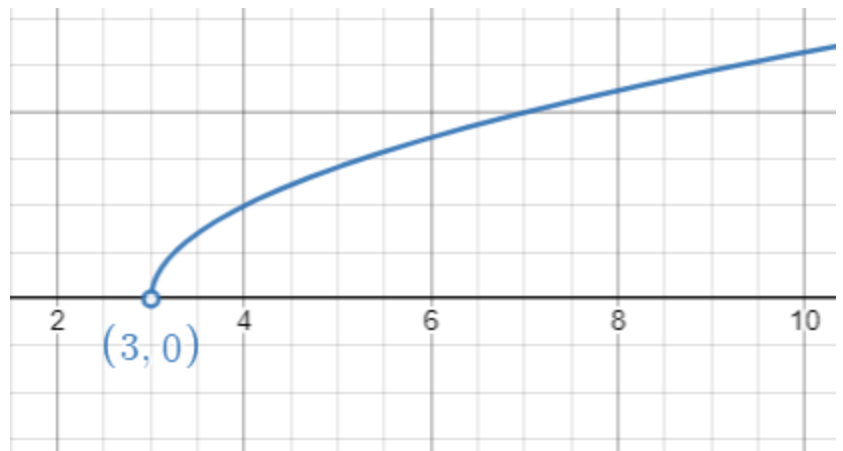
Decreasing Intervals: _____



4. Absolute Maximum: _____
 Absolute Minimum: _____
 Relative Maximum: _____
 Relative Minimum: _____
 Increasing Intervals: _____
 Decreasing Intervals: _____



5. Absolute Maximum: _____
 Absolute Minimum: _____
 Relative Maximum: _____
 Relative Minimum: _____
 Increasing Intervals: _____
 Decreasing Intervals: _____



6. Absolute Maximum: _____
 Absolute Minimum: _____
 Relative Maximum: _____
 Relative Minimum: _____
 Increasing Intervals: _____
 Decreasing Intervals: _____

