

Geometry Chapter 10 Practice Test 2

Name: _____

Time Start: _____ Finish: _____

Total Time = _____

- _____ 1. What is the volume of a sphere with a radius of 8 cm?
- _____ 2. What is the surface area of a sphere with a radius of 5 cm?
- _____ 3. What volume of a pyramid with a square base of 9 cm and a height of 6 cm?
- _____ 4. What is the surface area of a cylinder with a radius of 6 cm and a height double its radius?
- _____ 5. How much more area does a 14 inch pizza have than an 10 inch pizza?
- _____ 6. Box A is 10 cm by 8 cm by 5 cm. Box B is 10 cm by 8 cm by 4 cm. If box B is put into box A, how much room (volume) is left in box A?
- _____ 7. How much volume is left in a 2 cm cube if a 1 cm cube is placed inside the 2 cm cube?
- _____ 8. How much volume is left inside a 6 cm sphere (diameter) if a 3 cm sphere (diameter) is placed inside the 6 cm sphere?
- _____ 9. A dog is tied to a stake with a 10 foot rope. How much area does the dog have to play in?
- _____ 10. If a dog is tied to a stake with a 84 foot rope, how many full laps does the dog have to run in a circle to run a mile (5,280 feet)?

Find the area or the area of the shaded section for the below shapes.

Figure 11

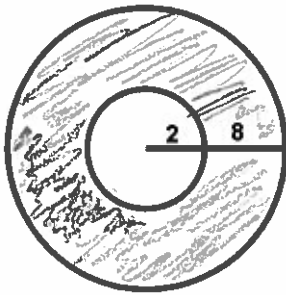


Figure 12



Figure 13




Figure 14

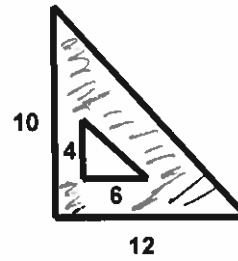


Figure 15

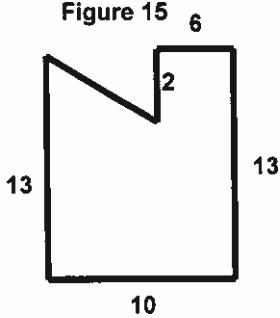


Figure 16

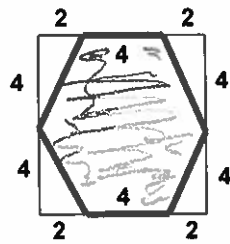


Figure 17

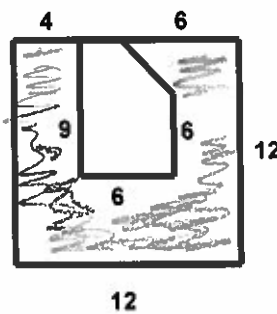
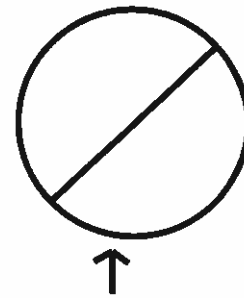


Figure 18



Circumference is 377 cm.
Find the diameter.

Figure 19

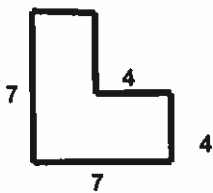


Figure 20

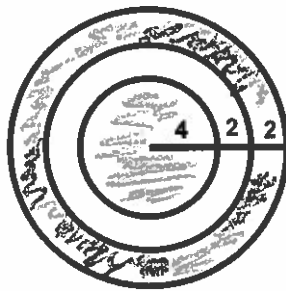


Figure 21

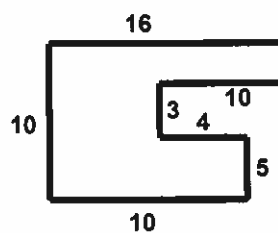


Figure 22

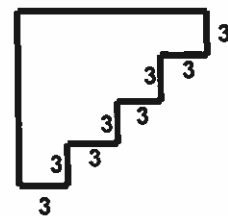


Figure 11 = _____

Figure 12 = _____

Figure 13 = _____

Figure 14 = _____

Figure 15 = _____

Figure 16 = _____

Figure 17 = _____

Figure 18 diameter = _____

Figure 19 = _____

Figure 20 = _____

Figure 21 = _____

Figure 22 = _____