








GRIDS 3

Name _____

| | A | B | C | D | E | F | G | H |
|---|---|---|---|---|---|---|---|---|
| 1 | | | |  | | | | |
| 2 | | | | | | | | |
| 3 |  | | | | | | | |
| 4 | | | | | | | | |
| 5 | | | | | | |  | |
| 6 | | |  | | | | | |
| 7 | | |  | | | | | |
| 8 |  | | | | | | | |
| 9 | | | | | |  | | |

List all the cells where the image is located.







Count the number of cells in which each image occurred and put that number below.







Make a bar graph below representing the data you recorded above.

